

Name: _____


Draw a line from the shape on the left to the correct name on the right.



Rectangle



Circle



Star



Oval



Square



Triangle

HOW MANY _____ ARE THERE?

1. Write the answers to the following questions. Follow the order: number, color and at the end, the geometric shape.


How many diamonds are there?

There are eleven yellow diamonds.




1. How many rectangles are there?

There are _____.



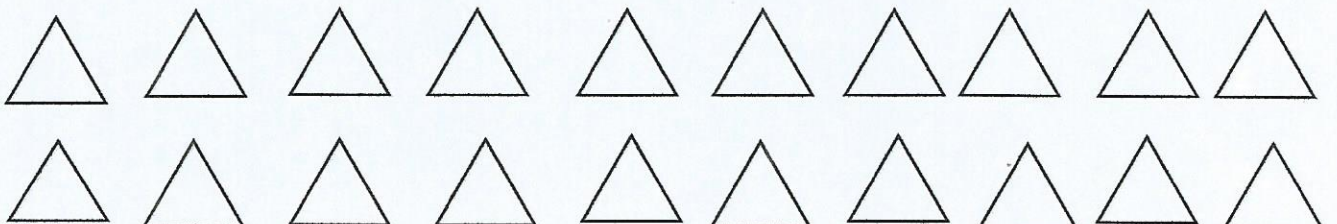
2. How many hearts are there?

There are _____.



3. How many triangles are there?

There are _____.



Haunted House Color by Number



1 = yellow

2 = gray

3 = dark brown

4 = light purple

5 = dark purple

6 = dark blue

